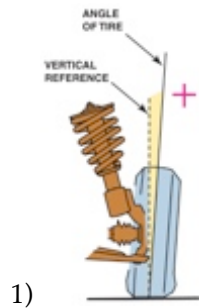


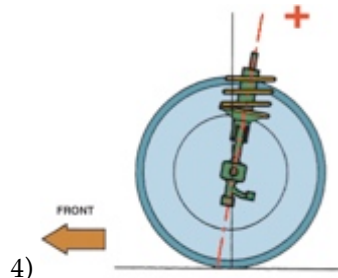
Name _____

MATCHING. Choose the item in column 2 that best matches each item in column 1.

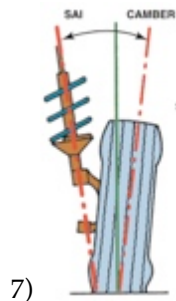
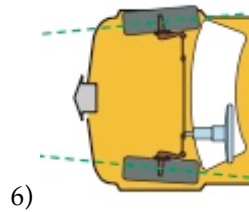


2) Causes vehicle to pull to one side

3) Excessive positive camber



5) Excessive toe-out



A) Toe angle

B) Outside edge tire wear

C) Inner shoulder tire wear

D) Included angle

E) Unequal caster angles

F) Camber angle

G) Caster angle

1) _____

2) _____

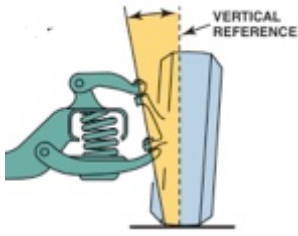
3) _____

4) _____

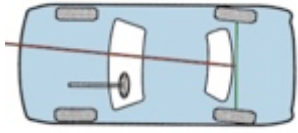
5) _____

6) _____

7) _____



8)



9)

10) Front-wheel-drive scrub radius

A) Usually negative

B) Thrust angle

C) Steering axis inclination

D) Usually positive

8) _____

9) _____

10) _____