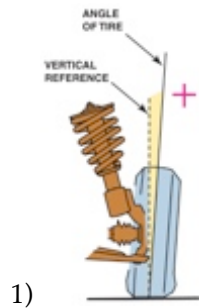


Name _____

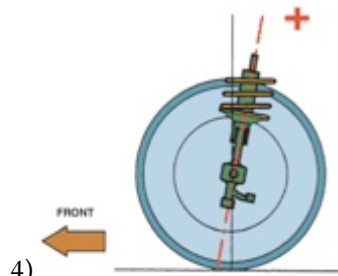
MATCHING. Choose the item in column 2 that best matches each item in column 1.



- 1) _____
- 2) Causes vehicle to pull to one side
- 3) Excessive positive camber

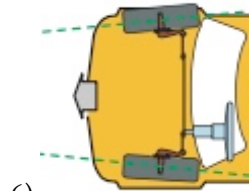
- A) Toe angle
- B) Outside edge tire wear
- C) Inner shoulder tire wear
- D) Included angle
- E) Unequal caster angles
- F) Camber angle
- G) Caster angle

- 1) _____
- 2) _____
- 3) _____



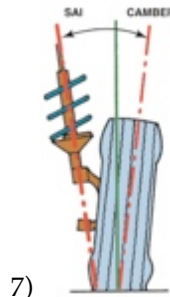
- 4) _____
- 5) Excessive toe-out

- 4) _____
- 5) _____



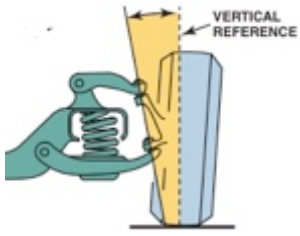
6) _____

6) _____



7) _____

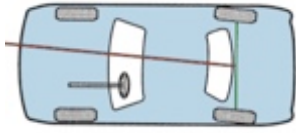
7) _____



8)

- A) Usually negative
- B) Thrust angle
- C) Steering axis inclination
- D) Usually positive

8) _____



9)

9) _____

10) Front-wheel-drive scrub radius

10) _____

Answer Key

Testname: MATCH 124

1) F

Page Ref: 1524

2) E

Page Ref: 1528

3) B

Page Ref: 1525

4) G

Page Ref: 1527

5) C

Page Ref: 1530

6) A

Page Ref: 1529

7) D

Page Ref: 1532

8) C

Page Ref: 1532

9) B

Page Ref: 1535

10) A

Page Ref: 1533