

Name \_\_\_\_\_

**MATCHING. Choose the item in column 2 that best matches each item in column 1.**

1) Wiring schematic

A) Motor

1) \_\_\_\_\_

2) 

B) Fuse

2) \_\_\_\_\_

3) GRY/WHT

C) Resistor

3) \_\_\_\_\_

4) Relay power circuit


D) Gray tracer

4) \_\_\_\_\_

5) Reduces relay voltage spikes


E) LED

5) \_\_\_\_\_

6) 

F) Battery

6) \_\_\_\_\_

7) 

G) White tracer

7) \_\_\_\_\_

8) 

H) Capacitor

I) Relay

8) \_\_\_\_\_

9) 

J) 30


K) Connector

9) \_\_\_\_\_

10) 

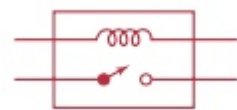
M) 86

10) \_\_\_\_\_

11) 

N) Diagram

11) \_\_\_\_\_

12) 

12) \_\_\_\_\_

## Answer Key

Testname: AAEE\_MATCH7

1) N

Page Ref: 71

2) K

Page Ref: 73

3) G

Page Ref: 71

4) J

Page Ref: 78

5) C

Page Ref: 79

6) L

Page Ref: 73

7) E

Page Ref: 73

8) C

Page Ref: 73

9) B

Page Ref: 73

10) F

Page Ref: 73

11) A

Page Ref: 74

12) I

Page Ref: 73