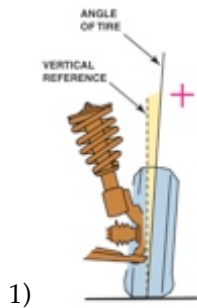


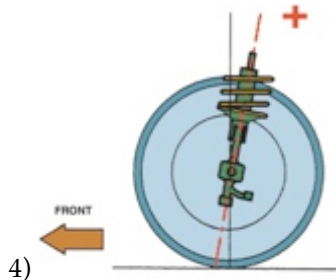
Name \_\_\_\_\_

**MATCHING.** Choose the item in column 2 that best matches each item in column 1.

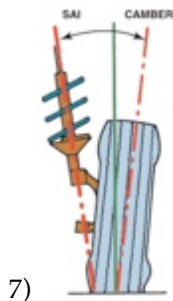
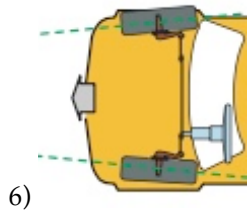


2) Causes vehicle to pull to one side

3) Excessive positive camber



5) Excessive toe-out



A) Included angle

B) Caster angle

C) Camber angle

D) Unequal caster angles

E) Toe angle

F) Inner shoulder tire wear

G) Outside edge tire wear

1) \_\_\_\_\_

2) \_\_\_\_\_

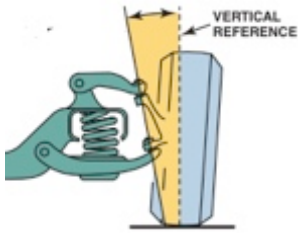
3) \_\_\_\_\_

4) \_\_\_\_\_

5) \_\_\_\_\_

6) \_\_\_\_\_

7) \_\_\_\_\_



8)

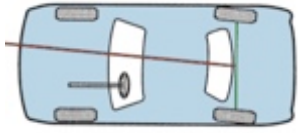
A) Steering axis inclination

B) Usually negative

C) Thrust angle

D) Usually positive

8) \_\_\_\_\_



9)

9) \_\_\_\_\_

10) Front-wheel-drive scrub radius

10) \_\_\_\_\_

## Answer Key

Testname: CHASSIS8\_MATCH35

1) C

Page Ref: 577

2) D

Page Ref: 578

3) G

Page Ref: 578

4) B

Page Ref: 580

5) F

Page Ref: 584

6) E

Page Ref: 583

7) A

Page Ref: 586

8) A

Page Ref: 586

9) C

Page Ref: 590

10) B

Page Ref: 587