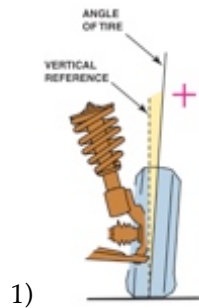


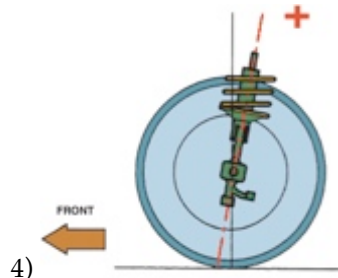
Name _____

MATCHING. Choose the item in column 2 that best matches each item in column 1.

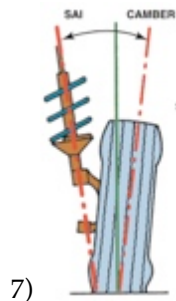
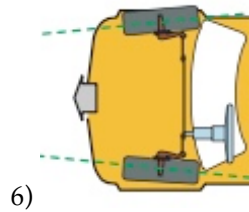


2) Causes vehicle to pull to one side

3) Excessive positive camber



5) Excessive toe-out



A) Camber angle

B) Inner shoulder tire wear

C) Toe angle

D) Included angle

E) Unequal caster angles

F) Caster angle

G) Outside edge tire wear

1) _____

2) _____

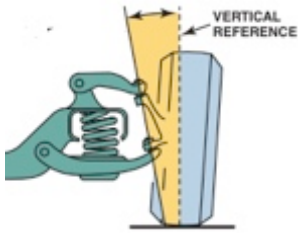
3) _____

4) _____

5) _____

6) _____

7) _____



8)

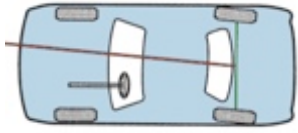
A) Steering axis inclination

B) Thrust angle

C) Usually positive

D) Usually negative

8) _____



9)

9) _____

10) Front-wheel-drive scrub radius

10) _____

Answer Key

Testname: ASSA8MATCH19

- 1) A
Page Ref: 325
- 2) E
Page Ref: 329
- 3) G
Page Ref: 326
- 4) F
Page Ref: 328
- 5) B
Page Ref: 332
- 6) C
Page Ref: 331
- 7) D
Page Ref: 334
- 8) A
Page Ref: 334
- 9) B
Page Ref: 338
- 10) D
Page Ref: 335