

Name \_\_\_\_\_

**MATCHING. Choose the item in column 2 that best matches each item in column 1.**

1) Wiring schematic

A) Gray tracer

1) \_\_\_\_\_



B) Lamp

2) \_\_\_\_\_

3) GRY/WHT

C) Fuse

3) \_\_\_\_\_

4) Relay power circuit

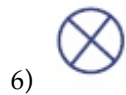
D) Capacitor

4) \_\_\_\_\_

5) Reduces relay voltage spikes

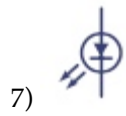
E) Relay

5) \_\_\_\_\_



F) White tracer

6) \_\_\_\_\_



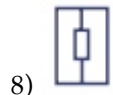
G) Connector

7) \_\_\_\_\_

H) Battery

I) Resistor

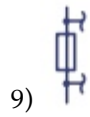
8) \_\_\_\_\_



J) 30

K) Diagram

9) \_\_\_\_\_



L) LED

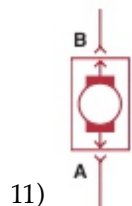
M) Motor

10) \_\_\_\_\_

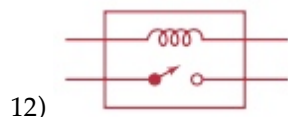


N) 86

11) \_\_\_\_\_



11) \_\_\_\_\_



12) \_\_\_\_\_

12) \_\_\_\_\_

## Answer Key

Testname: AEEP8\_MATCH9

1) K

Page Ref: 131

2) G

Page Ref: 133

3) F

Page Ref: 131

4) J

Page Ref: 138

5) I

Page Ref: 140

6) B

Page Ref: 132

7) L

Page Ref: 132

8) I

Page Ref: 132

9) C

Page Ref: 132

10) H

Page Ref: 133

11) M

Page Ref: 133

12) E

Page Ref: 138