

Name \_\_\_\_\_

**MATCHING. Choose the item in column 2 that best matches each item in column 1.**

1) Wiring schematic

A) Battery

1) \_\_\_\_\_



B) Motor

2) \_\_\_\_\_

3) GRY/WHT

C) Fuse

3) \_\_\_\_\_

4) Relay power circuit

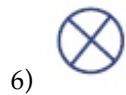
D) Diagram

4) \_\_\_\_\_

5) Reduces relay voltage spikes

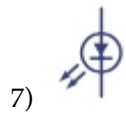
E) 30

5) \_\_\_\_\_



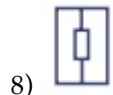
F) White tracer

6) \_\_\_\_\_



G) 86

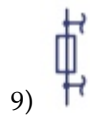
7) \_\_\_\_\_



H) Gray tracer

I) Relay

8) \_\_\_\_\_



J) Resistor

K) Capacitor

L) Connector

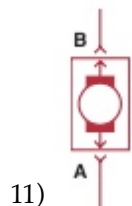
9) \_\_\_\_\_



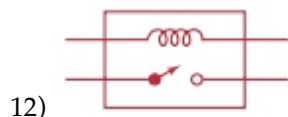
M) Lamp

N) LED

10) \_\_\_\_\_



11) \_\_\_\_\_



12) \_\_\_\_\_

## Answer Key

Testname: AEE6\_MATCH12

1) D

Page Ref: 134

2) L

Page Ref: 136

3) F

Page Ref: 135

4) E

Page Ref: 142

5) J

Page Ref: 142

6) M

Page Ref: 136

7) N

Page Ref: 136

8) J

Page Ref: 136

9) C

Page Ref: 136

10) A

Page Ref: 136

11) B

Page Ref: 137

12) I

Page Ref: 142