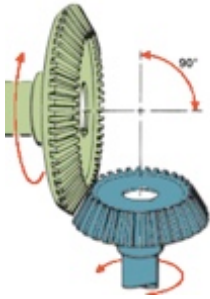



Name _____

MATCHING. Choose the item in column 2 that best matches each item in column 1.



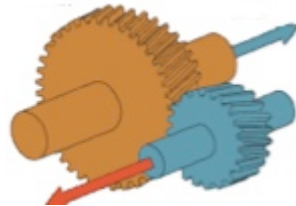
1)

2) Splined to clutch disc



3)

4) Connected to drive shaft



5)

6) Allows easier shifting

7) Moves the synchronizer sleeve

8) A type of clutch

9) Locks input shaft to the output shaft

10) Provides gear reduction

A) Spur gear

B) Input shaft

C) Helical gear

D) Bevel gear

E) Shift fork

F) Reverse gear

G) Synchronizer

H) Synchronizer keys

I) Fourth gear

J) Synchronizer stop ring

K) First gear

L) Main shaft

1) _____

2) _____

3) _____

4) _____

5) _____

6) _____

7) _____

8) _____

9) _____

10) _____

Answer Key

Testname: MATCH 127

1) D

Page Ref: 1584

2) B

Page Ref: 1586

3) A

Page Ref: 1583

4) L

Page Ref: 1586

5) C

Page Ref: 1583

6) G

Page Ref: 1587

7) E

Page Ref: 1588

8) J

Page Ref: 1589

9) I

Page Ref: 1591

10) K

Page Ref: 1591