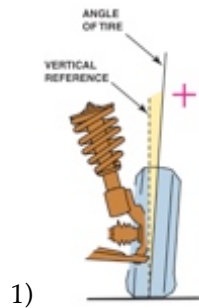
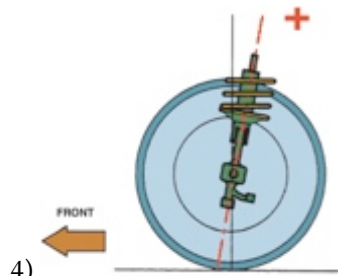


Name _____

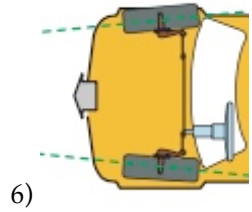
MATCHING. Choose the item in column 2 that best matches each item in column 1.



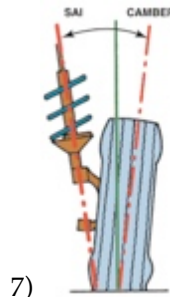
- 1) _____
- 2) Causes vehicle to pull to one side
- 3) Excessive positive camber



- 4) _____
- 5) Excessive toe-out



- 6) _____



- 7) _____

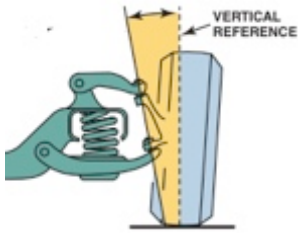
- A) Toe angle
- B) Outside edge tire wear
- C) Inner shoulder tire wear
- D) Included angle
- E) Unequal caster angles
- F) Camber angle
- G) Caster angle

- 1) _____
- 2) _____
- 3) _____

- 4) _____
- 5) _____

- 6) _____

- 7) _____



8)

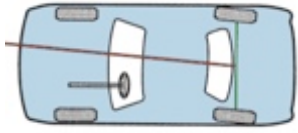
A) Usually negative

B) Thrust angle

C) Steering axis inclination

D) Usually positive

8) _____



9)

9) _____

10) Front-wheel-drive scrub radius

10) _____

Answer Key

Testname: MATCH 124

1) F

Page Ref: 1524

2) E

Page Ref: 1528

3) B

Page Ref: 1525

4) G

Page Ref: 1527

5) C

Page Ref: 1530

6) A

Page Ref: 1529

7) D

Page Ref: 1532

8) C

Page Ref: 1532

9) B

Page Ref: 1535

10) A

Page Ref: 1533