

Name \_\_\_\_\_

**MATCHING. Choose the item in column 2 that best matches each item in column 1.**

1) Wiring schematic

A) Resistor

1) \_\_\_\_\_

2) 

B) 86

2) \_\_\_\_\_

3) GRY/WHT

C) Motor

3) \_\_\_\_\_

4) Relay power circuit


D) Diagram

4) \_\_\_\_\_

5) Reduces relay voltage spikes

E) Fuse


5) \_\_\_\_\_

6) 

F) Relay

G) White tracer


6) \_\_\_\_\_

7) 

H) Gray tracer

I) LED


7) \_\_\_\_\_

8) 

J) Capacitor

K) 30

8) \_\_\_\_\_

9) 

L) Lamp


M) Battery

9) \_\_\_\_\_

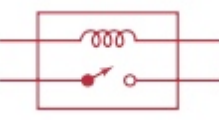
10) 

N) Connector

10) \_\_\_\_\_

11) 

11) \_\_\_\_\_

12) 

12) \_\_\_\_\_

## Answer Key

Testname: MATCH 45

1) D

Page Ref: 515

2) N

Page Ref: 517

3) G

Page Ref: 515

4) K

Page Ref: 522

5) A

Page Ref: 523

6) L

Page Ref: 516

7) I

Page Ref: 516

8) A

Page Ref: 516

9) E

Page Ref: 516

10) M

Page Ref: 517

11) C

Page Ref: 518

12) F

Page Ref: 523