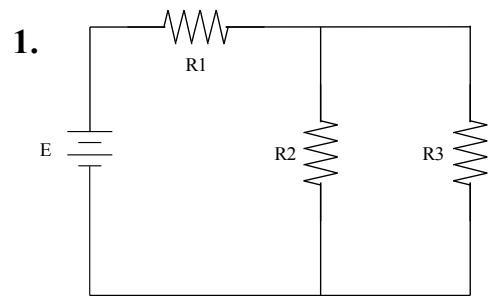


Series-Parallel Circuit Task Sheet #1

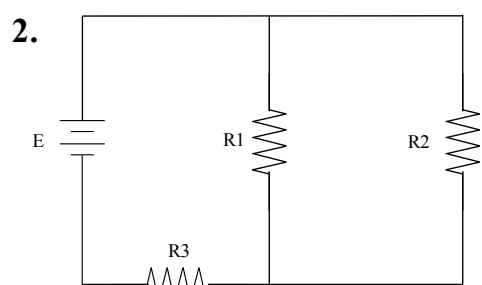
Meets ASE Task: (A6-A-2) P-1 Diagnose Electrical/Electronic Integrity for Series, Parallel, and Series-Parallel Circuits Using Principles of Electricity (Ohm's Law).

Name _____ Date _____ Time on Task _____

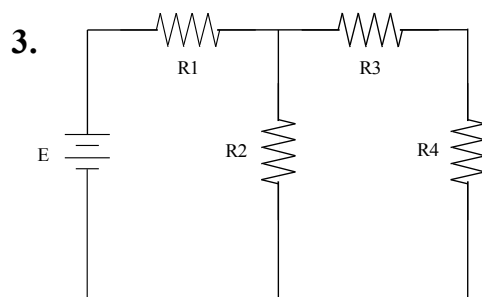
Make/Model/Year _____ VIN _____ Evaluation: 4 3 2 1



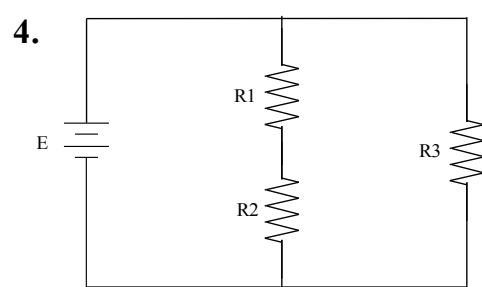
E = 12 volts
 $I_T = 3$ amperes
R1 = _____
R2 = 4 ohms
R3 = 4 ohms



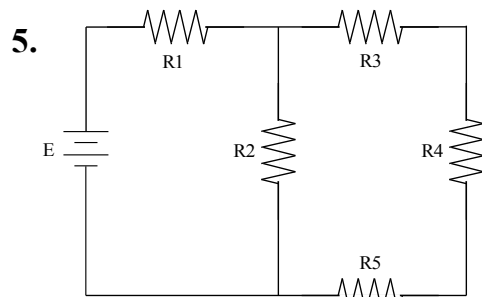
E = 12 volts
 $I_T = 3$ amperes
R1 = 4 ohms
R2 = 4 ohms
R3 = _____



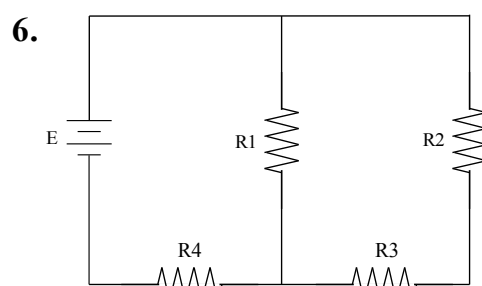
E = 12 volts
 $I_T =$ _____
R1 = 2 ohms
R2 = 4 ohms
R3 = 2 ohms
R4 = 2 ohms



E = _____
 $I_T = 3$ amperes
R1 = 4 ohms
R2 = 4 ohms
R3 = 8 ohms



E = 12 volts
 $I_T =$ _____
R1 = 2 ohms
R2 = 8 ohms
R3 = 2 ohms
R4 = 4 ohms
R5 = 2 ohms



E = 12 volts
 $I_T =$ _____
R1 = 12 ohms
R2 = 6 ohms
R3 = 6 ohms
R4 = 2 ohms