

Maintenance and Light Repair Workbook Chapter 8

Name: _____ Class _____ Date: _____
Instructor: _____ Textbook Pages 75-87


Answer the questions and identify the page number that the answer was found in the textbook

1. Most of the threaded fasteners on vehicles are _____. Page ____

- A. Allen bolts
- B. Torx bolts
- C. Pan head screws
- D. Cap screws

2. A _____ is a short rod with threads on both ends. Page ____


3. The strength or classification of a bolt is called the __ grade___. Page ____



4. Name the 3 types of locking nuts in the picture above. Page ____

5. A _____ is a hardened steel round cutter with teeth on the inside of the center hole.

Page __




6. What are the names of the tools in the picture above:

Page __

7. Plain flat washers are used to provide an even clamping load around the fastener. Page 81

8. Lock washers are designed to prevent a nut from loosening.

Page __



9. What is the part in the picture above used for?

Page __
